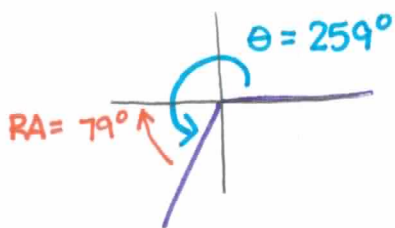
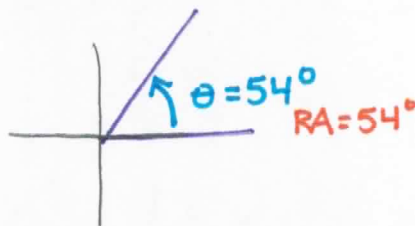


Draw each angle/arc in standard position and find and show the reference angle.

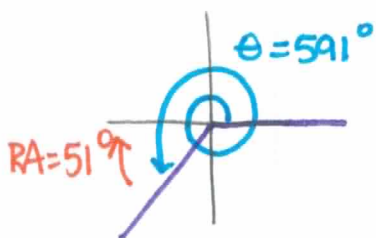
1.  $259^\circ$



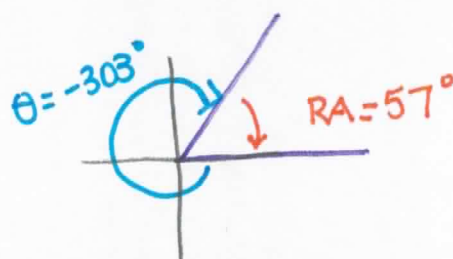
2.  $54^\circ$



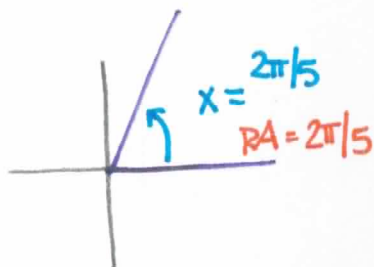
3.  $591^\circ$



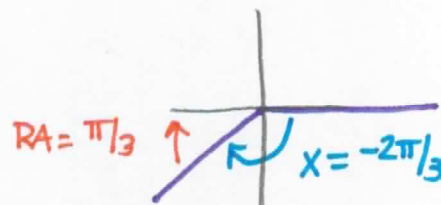
4.  $-303^\circ$



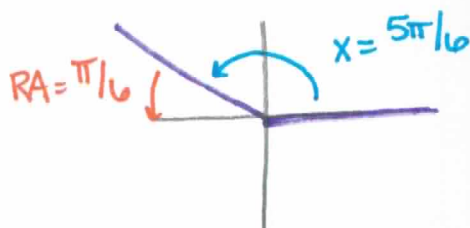
5.  $\frac{2\pi}{5}$



6.  $-\frac{2\pi}{3}$



7.  $\frac{5\pi}{6}$



8.  $\frac{7\pi}{4}$

